

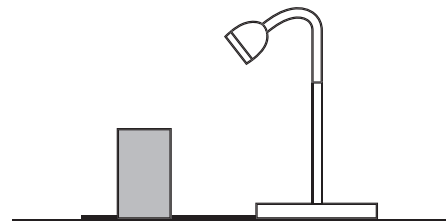
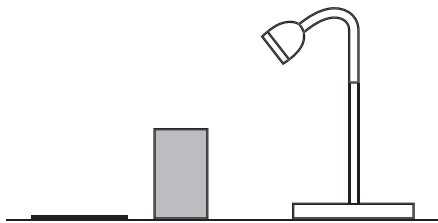
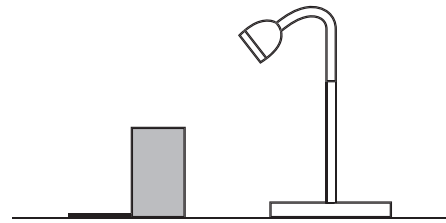
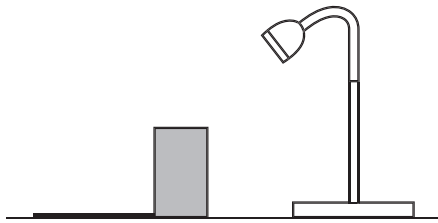


## Next Step



Look at the pictures below. Which picture shows the correct length and direction of the shadow made by the block?

Tick **one**.



## Next Step



Look at the pictures below. Which picture shows the correct length and direction of the shadow made by the block?

Tick **one**.

